



# Sweet Results

Write the total number of candy hearts for each color.

pink \_\_\_\_\_

orange \_\_\_\_\_

yellow \_\_\_\_\_

purple \_\_\_\_\_


green \_\_\_\_\_

white \_\_\_\_\_

Write the number sentences and use = or  $\neq$  to compare equations.

$$\underline{\hspace{2cm}} + \underline{\hspace{2cm}}$$

pink                  purple




$$\underline{\hspace{2cm}} + \underline{\hspace{2cm}}$$

purple                  pink

$$\underline{\hspace{2cm}} + \underline{\hspace{2cm}}$$

yellow                  green




$$\underline{\hspace{2cm}} + \underline{\hspace{2cm}}$$

orange                  white

$$\underline{\hspace{2cm}} + \underline{\hspace{2cm}}$$

purple                  yellow




$$\underline{\hspace{2cm}} + \underline{\hspace{2cm}}$$

white                  pink

$$\underline{\hspace{2cm}} + \underline{\hspace{2cm}}$$

pink                  green




$$\underline{\hspace{2cm}} + \underline{\hspace{2cm}}$$

yellow                  white

$$\underline{\hspace{2cm}} + \underline{\hspace{2cm}}$$

yellow                  pink



$$\underline{\hspace{2cm}} + \underline{\hspace{2cm}}$$

pink                  yellow